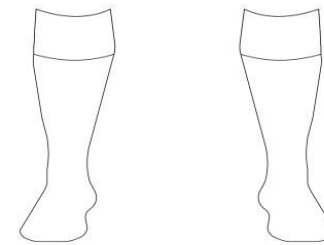
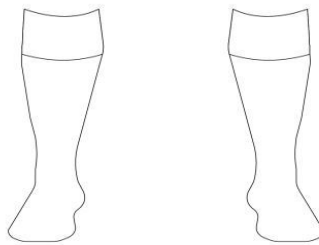


Maths

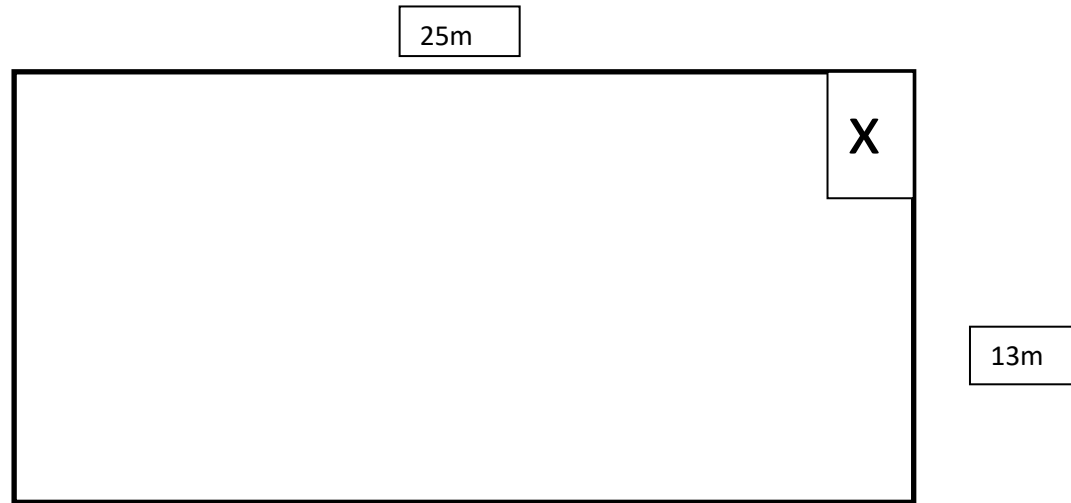
1. A ticket to see DLR Waves play at Jackson Park costs €5. If I have €50 how many tickets can I buy?
2. Design and colour your own version of your home and away club kit. If you need help with your club colours check out your club's online shop or website.

Jersey- €30
Shorts- €20
Socks- €10



Maths

3. (a) How much is a jersey? _____ (b) How many could I buy with €70? ____ (c) Would I have any change? _
4. (a) Could I buy shorts and socks if I had €20? _____ (b) How much more money would I need?
5. If you had €50 to spend what would you buy? Would you have any change?



1. Here is a plan of the Jackson Park dressing rooms. Calculate both the area and perimeter of the room.
2. If the door was placed at x where would you place the showers, toilets and benches? Mark them in the plan and give reasons for your answer.


Extension Work

3. Jackson Park has 10 types of rooms: Boardroom, Manager's Office, Toilets, Shop, Ticket Office, Kitchen, Lounge, Laundry Room, Kit Room, Referee's Room. Write a list from biggest to smallest and discuss your reasoning with a partner.

Maths

4. Draw a plan of each room using the plans below. The rooms may be an outline or contain as much detail as you would like to see in a plan.

Upstairs



Downstairs

