
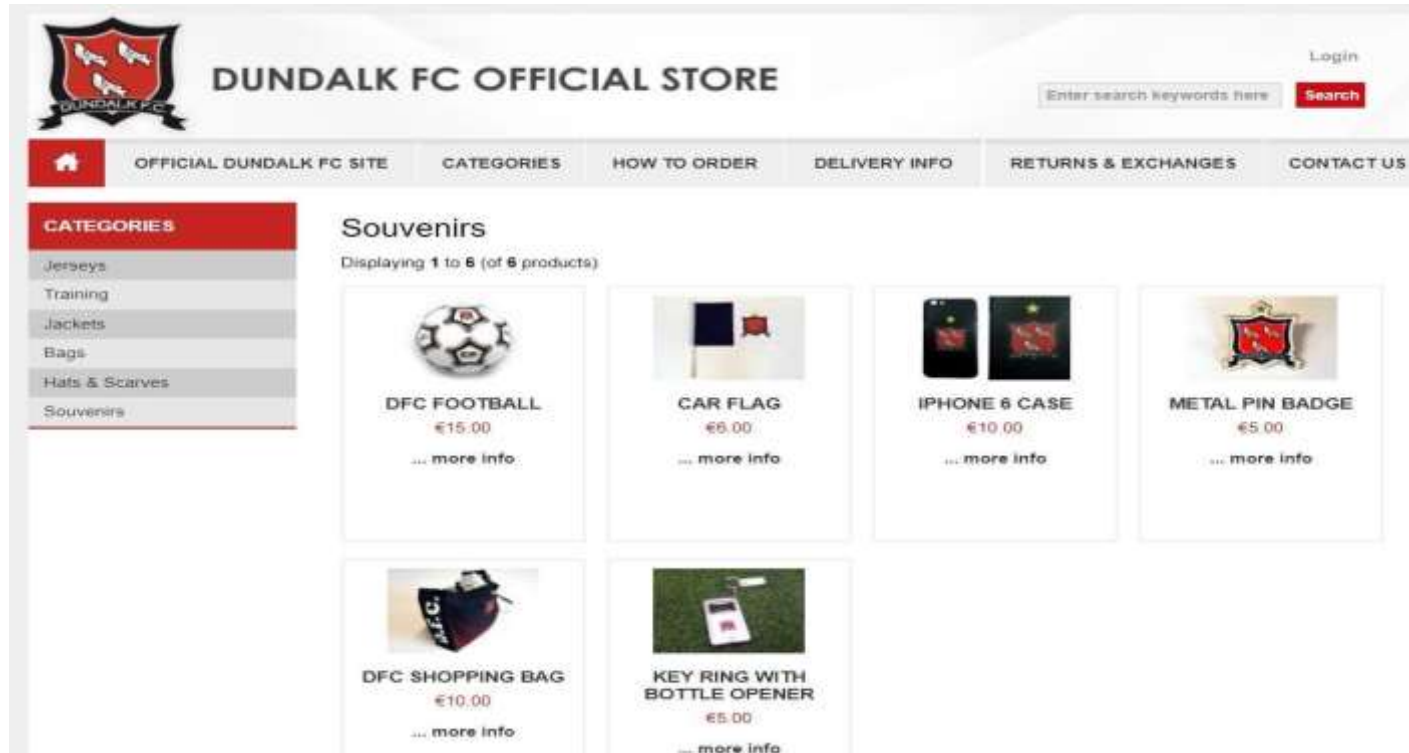


1. A child ticket to see Dundalk FC play at Oriel Park costs €10. If I have €50 how many tickets can I buy?
2. The match programme is €3. How much change will I get if I give the seller €20?











DUNDALK FC OFFICIAL STORE

OFFICIAL DUNDALK FC SITE | CATEGORIES | HOW TO ORDER | DELIVERY INFO | RETURNS & EXCHANGES | CONTACT US


CATEGORIES

- Jerseys
- Training
- Jackets
- Bags
- Hats & Scarves
- Souvenirs

Souvenirs
Displaying 1 to 6 (of 6 products)

 DFC FOOTBALL €15.00 ... more info	 CAR FLAG €5.00 ... more info	 IPHONE 6 CASE €10.00 ... more info	 METAL PIN BADGE €5.00 ... more info
 DFC SHOPPING BAG €10.00 ... more info	 KEY RING WITH BOTTLE OPENER €5.00 ... more info		

- How much is a football?
 - How many could I buy with €30?
 - Would I have any change?
- Could I buy a car flag and metal pin badge if I had €10?
 - How much more money would I need?
- If you had €50 to spend what would you buy? Would you have any change?

5th / 6th Class

1. On the left hand side is a picture of the Oriel Park dressing rooms. On the right is a plan of the dressing rooms. Calculate both the area and perimeter of the room.

2. If the door was placed at x where would you place the showers, toilets and benches? Mark them in the plan and give reasons for your answer.

Extension Work

3. Oriel Park has 10 types of rooms: Boardroom, Manager's Office, Toilets, Shop, Ticket Office, Kitchen, Lounge, Laundry Room, Kit Room, Referee's Room. Write a list from biggest to smallest and discuss your reasoning with a partner.
4. Draw a plan of each room using the plans below. The rooms may be an outline or contain as much detail as you would like to see in a plan.

Maths

Upstairs

Measures



Downstairs